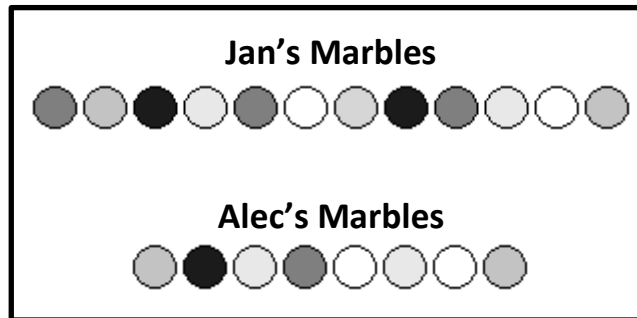




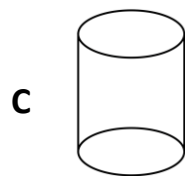
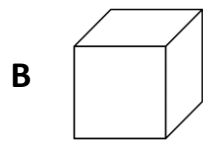
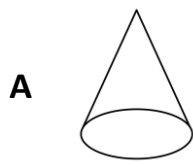
1. During recess, Jan and Alec are playing with marbles. Jan has 12 marbles, and Alec has 8 marbles.



**How many more marbles does Jan have than Alec?**

- A** 20 marbles
- B** 5 marbles
- C** 4 marbles
- 
2. **Which number sentence is true?**
- A**  $78 < 87$
- B**  $25 > 52$
- C**  $16 = 61$

3. Which 3-dimensional shape has 2 circles?



4. What time does the clock show?



A 1:00

B 1:30

C 6:00