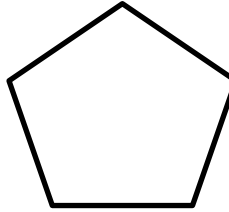




1. Tamika draws a closed shape with 5 sides.



What is the name of Tamika's shape?

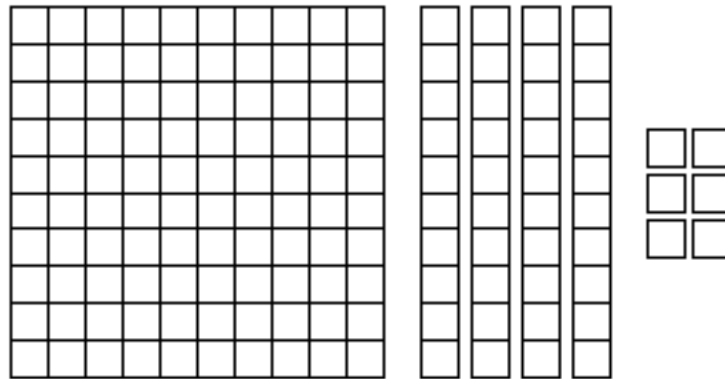
- A hexagon
 - B pentagon
 - C rectangle
 - D triangle
2. Study the picture graph. The students in Mr. Hamm's class vote for their favorite sports. Each ball or puck in the graph represents 1 vote.



How many more students chose football as their favorite sport than hockey as their favorite sport?

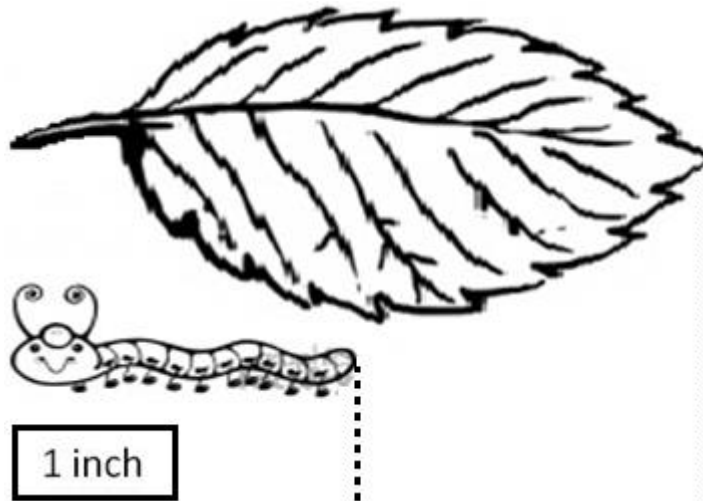
- A 1 student
- B 2 students
- C 3 students
- D 4 students

3. How many squares are shown?



- A 11 squares
- B 56 squares
- C 110 squares
- D 146 squares

4. About how much longer is the leaf than the caterpillar?



- A 1 inch
- B 2 inches
- C 3 inches
- D 4 inches