




1. There are 3 birds on a fence. Then 4 more birds land on the fence.



How many birds are now on the fence?



1 bird



5 birds

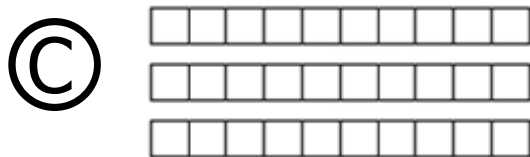
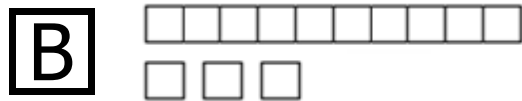
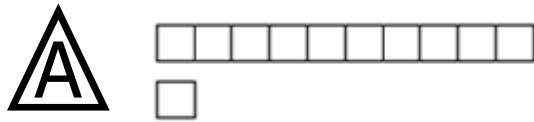


7 birds


2. Which shape is a triangle?



3. How many tens and ones are in the number 13?



4. How many balloons are shown in the picture?



A 2 balloons

B 5 balloons

C 6 balloons