


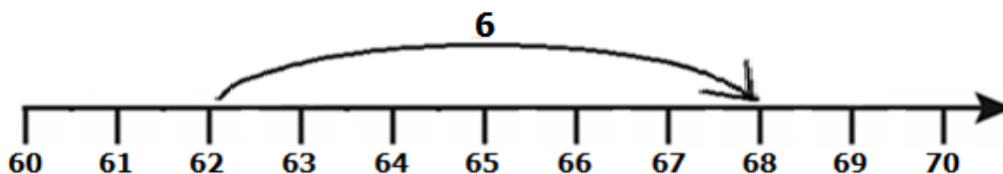


1. Study the picture graph. Each student in Mr. White's class vote for his or her favorite sport. Each ball or puck in the graph represents 1 vote.




How many more students chose football as their favorite sport than hockey as their favorite sport?

- A 1 student
B 2 students
C 3 students
D 4 students
2. Which equation *best* represents the problem shown with the number line?



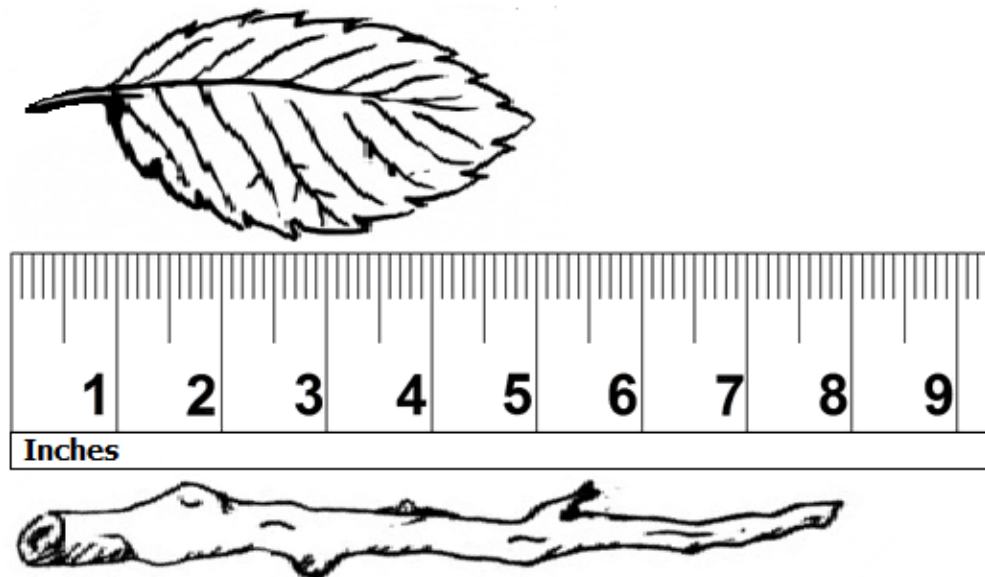
- A $6 + 68 = 62$
B $6 - 62 = 68$
C $62 - 6 = 68$
D $62 + 6 = 68$

3. If Carol colors in 10 more blocks gray, how many blocks will be gray?



- A 20 blocks
- B 30 blocks
- C 40 blocks
- D 50 blocks

4. Compare the objects.



About how much longer is the stick than the leaf?

- A 8 inches
- B 5 inches
- C 4 inches
- D 3 inches